

Name : _____

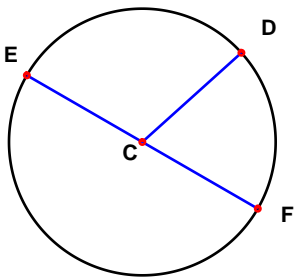
Score : _____

Teacher : _____

Date : _____

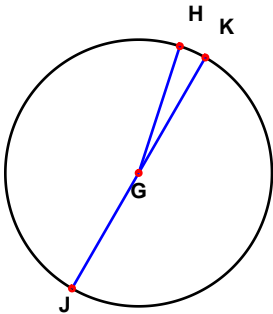
Solve the missing elements for each problem. Use 3.14 for Pi.

1)



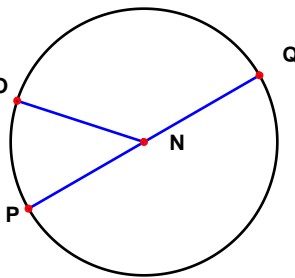
Radius: 10 inches
Diameter: _____
Circumference: _____
Area: _____

2)



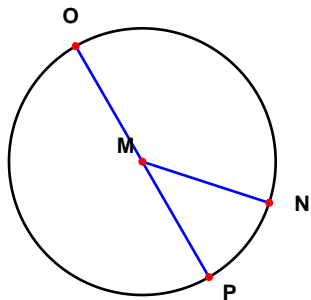
Radius: 8 inches
Diameter: _____
Circumference: _____
Area: _____

3)



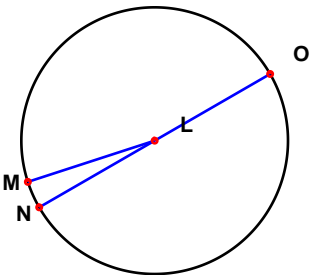
Radius: _____
Diameter: 8 inches
Circumference: _____
Area: _____

4)



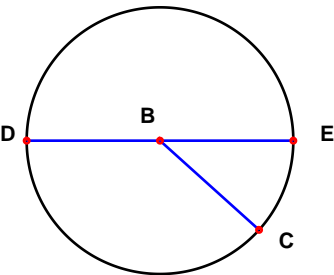
Radius: 15 inches
Diameter: _____
Circumference: _____
Area: _____

5)



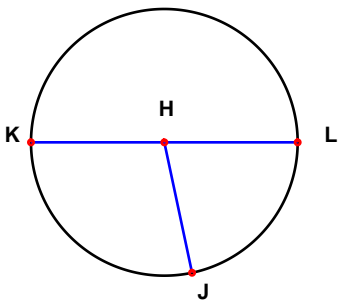
Radius: _____
Diameter: 14 inches
Circumference: _____
Area: _____

6)



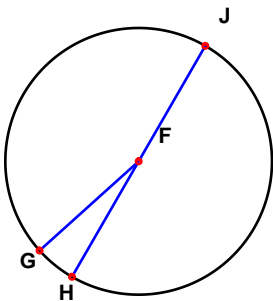
Radius: 9 inches
Diameter: _____
Circumference: _____
Area: _____

7)



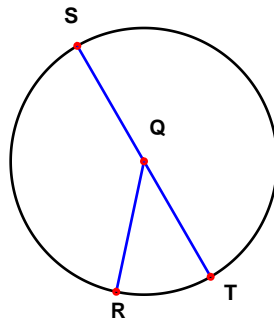
Radius: _____
Diameter: 38 inches
Circumference: _____
Area: _____

8)



Radius: _____
Diameter: 28 inches
Circumference: _____
Area: _____

9)



Radius: _____
Diameter: 12 inches
Circumference: _____
Area: _____